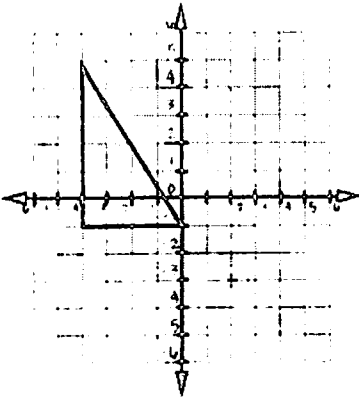


3.5 Area & Perimeter on the Coordinate Plane

Directions: Find the perimeter and area for each figure.

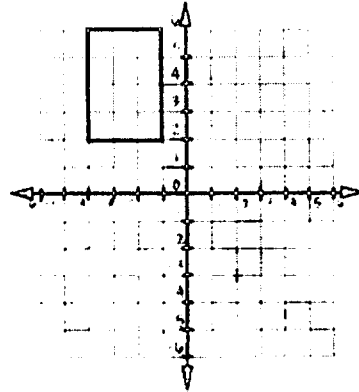
1)



Perimeter: _____

Area: _____

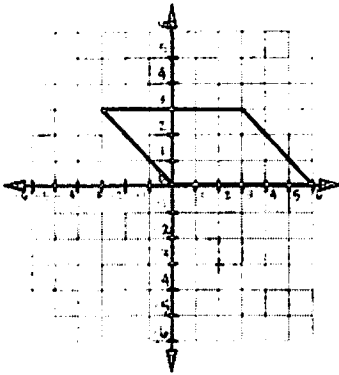
2)



Perimeter: _____

Area: _____

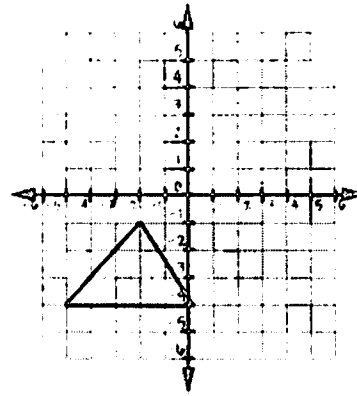
3)



Perimeter: _____

Area: _____

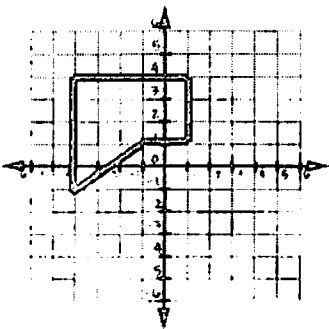
4)



Perimeter: _____

Area: _____

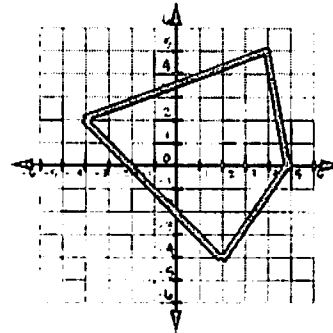
5)



Perimeter: _____

Area: _____

6)

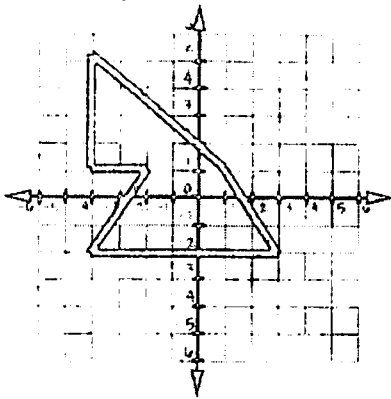


Perimeter: _____

Area: _____

Directions: Find the perimeter and area for each figure.

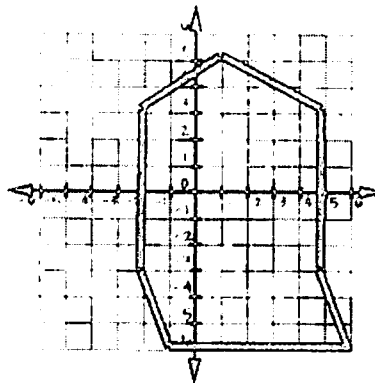
7)



Perimeter: _____

Area: _____

8)

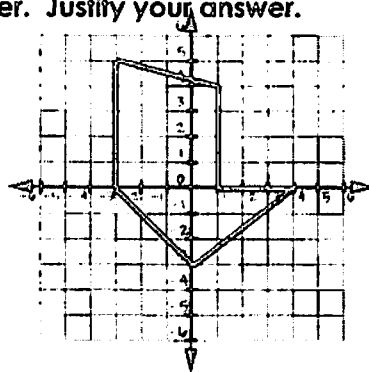
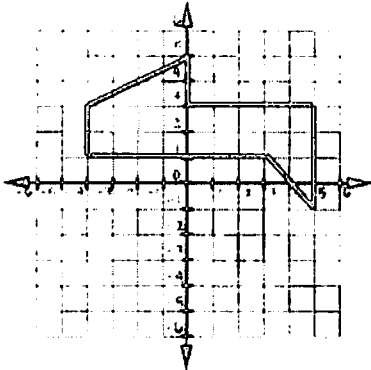


Perimeter: _____

Area: _____

Directions: Determine which shape has the larger perimeter. Justify your answer.

9)



Directions: Determine which shape has the larger area. Justify your answer.

10)

